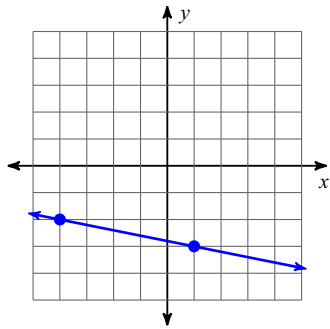


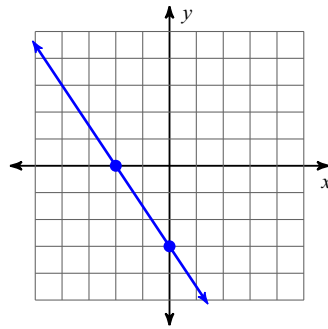
Slopes

Find the slope of each line.

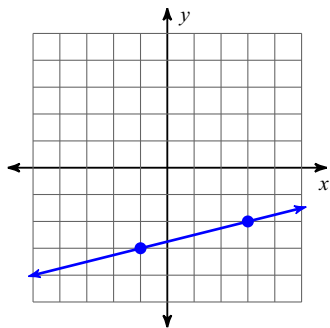
1)



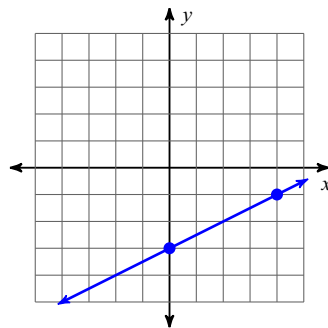
2)



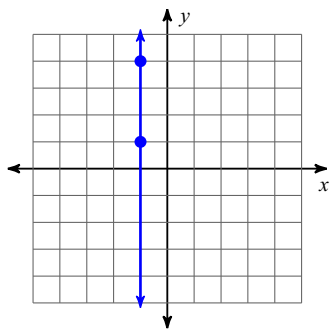
3)



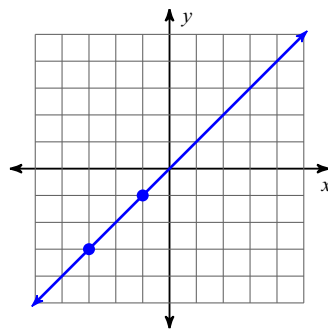
4)



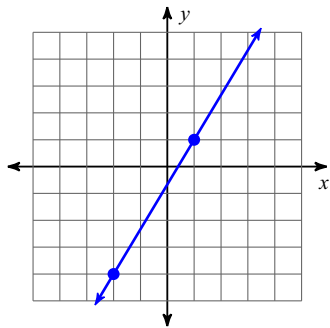
5)



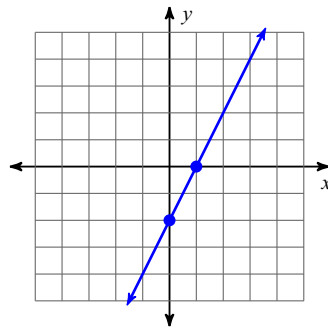
6)



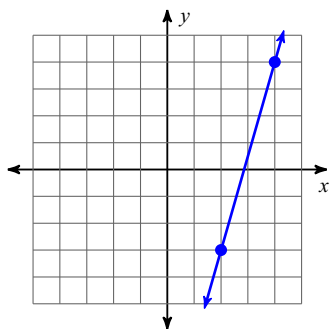
7)



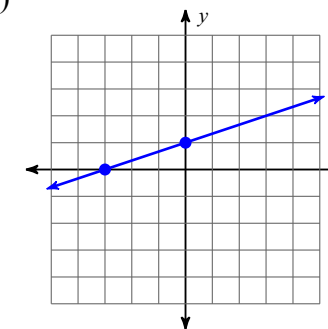
8)



9)



10)



Find the slope of the line through each pair of points.

11) $(12, 16), (-5, 12)$

12) $(8, 14), (-11, 12)$

13) $(-18, 3), (7, 1)$

14) $(16, 16), (16, 13)$

15) $(8, -3), (18, -3)$

16) $(13, -4), (-4, -14)$

17) $(12, -19), (2, -8)$

18) $(-15, 9), (9, 12)$

19) $(11, -8), (-9, 18)$

20) $(1, 10), (10, -1)$